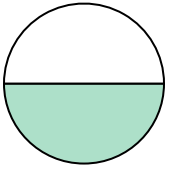




Determine which letter best describes the shaded portion.

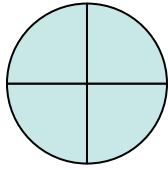
**Answers**

1)



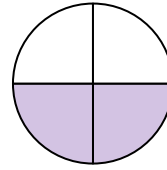
- A. two-fourths
- B. one-half
- C. one-fourth

2)



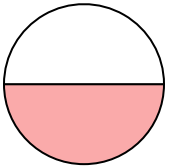
- A. two-halves
- B. four-fourths
- C. one-half

3)



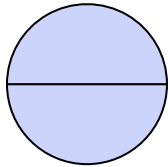
- A. two-fourths
- B. three-fourths
- C. one-quarter

4)



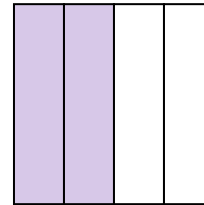
- A. one-half
- B. four-quarters
- C. two-quarters

5)




- A. two-fourths
- B. two-halves
- C. one-fourth

6)




- A. four-quarters
- B. three-fourths
- C. two-quarters

7)



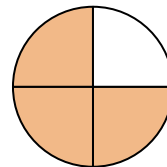
- A. one-fourth
- B. two-quarters
- C. two-halves

8)



- A. one-half
- B. two-quarters
- C. four-quarters

9)



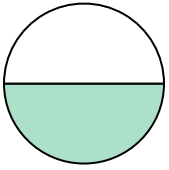
- A. one-half
- B. four-fourths
- C. three-quarters

- 1. \_\_\_\_\_
- 2. \_\_\_\_\_
- 3. \_\_\_\_\_
- 4. \_\_\_\_\_
- 5. \_\_\_\_\_
- 6. \_\_\_\_\_
- 7. \_\_\_\_\_
- 8. \_\_\_\_\_
- 9. \_\_\_\_\_



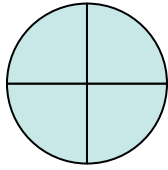
Determine which letter best describes the shaded portion.

1)



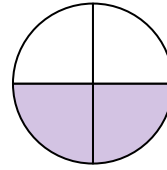
- A. two-fourths
- B. one-half
- C. one-fourth

2)



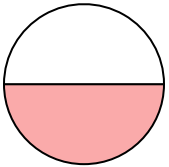
- A. two-halves
- B. four-fourths
- C. one-half

3)



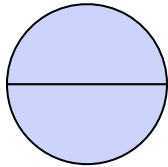
- A. two-fourths
- B. three-fourths
- C. one-quarter

4)



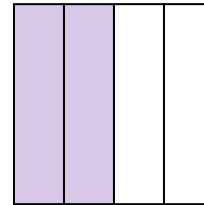
- A. one-half
- B. four-quarters
- C. two-quarters

5)




- A. two-fourths
- B. two-halves
- C. one-fourth

6)




- A. four-quarters
- B. three-fourths
- C. two-quarters

7)



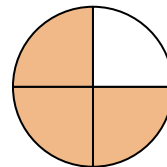
- A. one-fourth
- B. two-quarters
- C. two-halves

8)



- A. one-half
- B. two-quarters
- C. four-quarters

9)



- A. one-half
- B. four-fourths
- C. three-quarters

**Answers**

1. **B**

2. **B**

3. **A**

4. **A**

5. **B**

6. **C**

7. **C**

8. **C**

9. **C**